

Name: _____

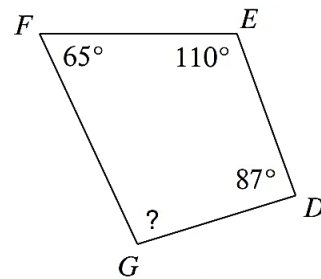
Quadrilateral Problems

1. Draw a sketch of two parallel lines.
2. Draw a sketch of two perpendicular lines.

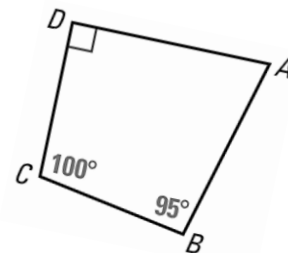
How many right angles do they form? _____

3. Draw a sketch of two lines that are neither parallel nor perpendicular and label their intersection point P.

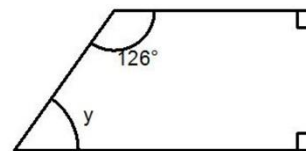
4. What is the measure of angle G? →



5. What is the measure of angle A? →



6. What is the measure of angle y? →



7. What is the measure of angle D? →

