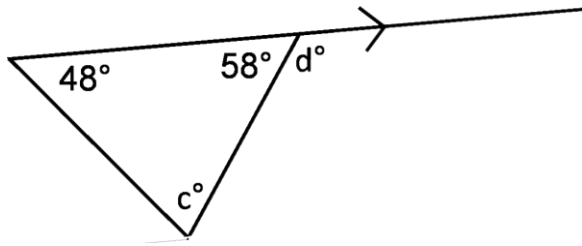


Name: _____

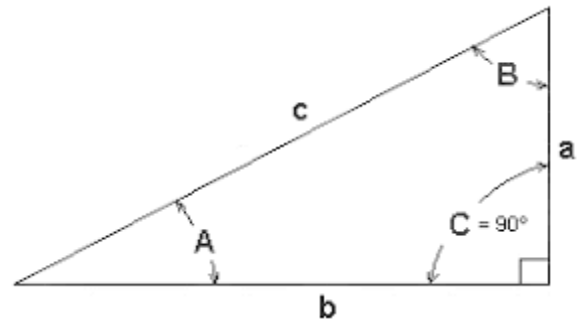
Triangle Problems



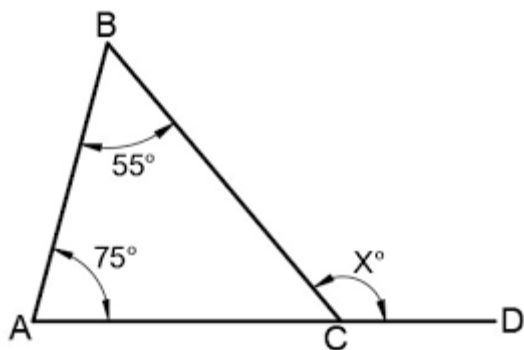
In the figure above, what is the value of c ? _____

What is the value of d ? _____

In the triangle on the right, what is the sum of angles A and B ?



(Notice the little box at angle C . The box means that angle C is a right angle. Here, you are also told that $C = 90^\circ$, but that wasn't necessary because the box was there. Whenever you see a little box at an angle, you should recognize that the angle is meant to be a right angle. Usually, you won't be told that it is.)



←In this triangle, what is the value of X ?