

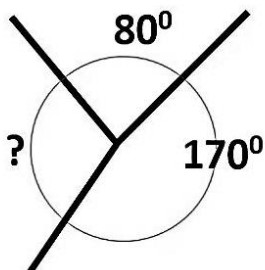
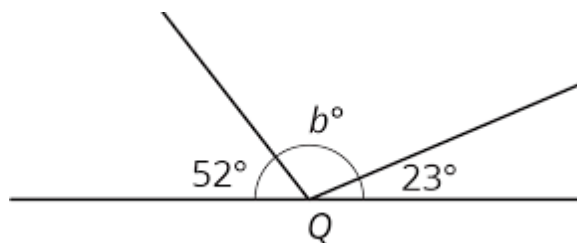
Name: _____

Angle Review



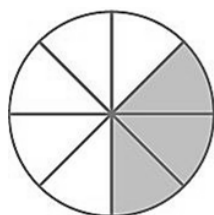
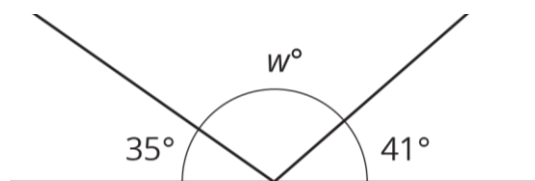
←What is the value of angle **x**? _____

What is the value of angle **b**? _____



←What is the value of the missing angle? _____

What is the value of angle **w**?



←The circle to the right has been divided into eighths. What is the value of the shaded angle?