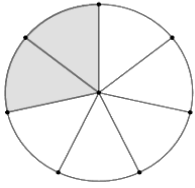



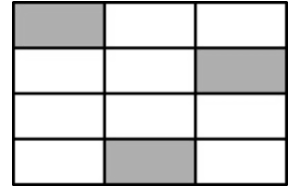
Name: _____

1. What fraction of the square is shaded? →

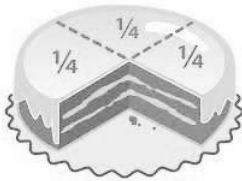


←What fraction of the circle is shaded?

What fraction of the large rectangle is shaded? →



- 2.

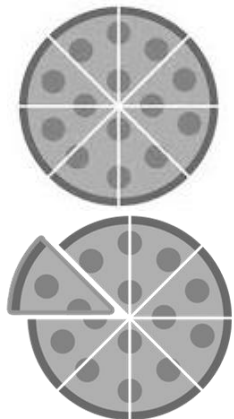


←What fraction of the cake has been eaten?

3. The image on the right shows one whole pizza that has been cut into 8 equal pieces.

The whole pizza is equal to _____ of the pizza.

Each individual piece is equal to _____ of the pizza.



←If Geraldo and Israel each have a piece of the pizza, how much pizza is left?

How much pizza is gone?

4. In the pizza on the right, each individual piece equals what fractional part of the whole pizza? →

