


1 Change the decimal to word form.
0.005

2 Solve. Write the sum in standard form.
12 tenths + 6 tenths =

3 True or false?
All squares are also rectangles.

4 What is the volume of the figure?

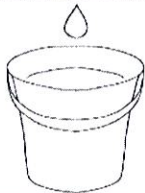


_____ cubed units

5 Solve. $65 \div 32$

6 Each cake takes $\frac{1}{2}$ a cup of sugar. If Jack has 3 cups of sugar, how many cakes can he bake?

7 What is the meaning of the following idiom?
'a drop in the bucket'



8 Write two words that use the root below.

ROOT:

MIT

MEANING:

send

9 Trace, then complete the sentence in cursive.

I am _____ years old.

Word 1: _____

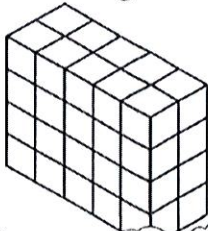
Word 2: _____

1 Change the decimal to word form.
3.106

2 Solve. Write the difference in standard form.
7 tenths - 3 tenths =

3 True or false?
Trapezoids must have 2 right angles.

4 What is the volume of the figure?



_____ cubic units

5 Solve.
 $24 \overline{) 597}$

6 Each cake takes $\frac{1}{2}$ a cup of sugar. If Juan wants to make 6 cakes, how many cups of sugar does he need?

7 What is the meaning of the following idiom?
"joined at the hip"



8 Write two words that use the root below.

ROOT:

TRANS

MEANING:

across

9 Trace, then complete the sentence in cursive.

I am _____ years old.

Word 1: _____


Word 2: _____

1 Change the decimal to word form.
106.48

2 Solve. Write the sum in standard form.
3 ones + 5 hundredths + 2 hundredths =

3 True or false?
All rectangles are also squares.

4 What is the volume of the figure?



5 Solve. $58 \div 17$

6 Miguel has 2 bags of dog food. He feeds his dog $\frac{1}{4}$ bag of dog food each day. How many days will 2 bags of dog food last?

7 Alliteration is when two or more nearby words have the same beginning sound. Finish the sentences.

- a. Greg gave _____.
- b. Bob baked _____.

8 Write two words that use the root below.

ROOT:

DICT

MEANING:

Speak, say

9 Trace, then write what state you live in.

I live in _____

Word 1: _____


Word 2: _____

1 Change the decimal to word form.
43.009

2 Solve. Write the difference in standard form.
28 hundredths - 16 hundredths =

3 True or false?
All quadrilaterals must have 2 pairs of parallel lines.

4 What is the volume of the figure?



5 Solve.
 $62 \overline{) 817}$

6 Kelly feeds her dog $\frac{1}{4}$ bag of dog food each day. If Kelly wants to feed her dog for 12 days, how many bags of dog food should she buy?

7 Alliteration is when two or more nearby words have the same beginning sound. Finish the sentences.

- a. Alex ate _____.
- b. The lazy lion _____.

8 Write two words that use the root below.

ROOT:

HYDR

MEANING:

Water

9 Trace, then write what state you live in.

I live in _____

Word 1: _____

Word 2: _____